









Identify 2D and 3D shapes

Using the word bank, write the correct name of each 2D and 3D shape below.

			
<input type="text"/>	<input type="text"/>	<input type="text"/>	<input type="text"/>
			
<input type="text"/>	<input type="text"/>	<input type="text"/>	<input type="text"/>

sphere

[twinkl.com](https://www.twinkl.com)

cone

[twinkl.com](https://www.twinkl.com)

cuboid

[twinkl.com](https://www.twinkl.com)

square

[twinkl.com](https://www.twinkl.com)

cube

[twinkl.com](https://www.twinkl.com)

triangle

[twinkl.com](https://www.twinkl.com)

rectangle







[twinkl.com](https://www.twinkl.com)

circle

[twinkl.com](https://www.twinkl.com)

Identify 2D and 3D shapes

Using the word bank, write the correct name of each 2D and 3D shape below.

			
_____	_____	_____	_____
			
_____	_____	_____	_____
			
_____	_____	_____	_____
			
_____	_____	_____	_____

Word Bank

sphere	kite	square-based pyramid	triangular prism
decagon	triangle	rectangle	rhombus
cone	cylinder	cube	cuboid
tetrahedron	circle	rectangular prism	cube

Identify 2D and 3D shapes

Write the correct name of each 2D and 3D shape below.

 _____	 _____	 _____	 _____
 _____	 _____	 _____	 _____
 _____	 _____	 _____	 _____
 _____	 _____	 _____	 _____

Challenge

Which of these statements are correct?

- ☐ A square is a rectangle. ☐ A cube has 4 faces.
- ☐ A rectangle is a square. ☐ A rhombus is not a parallelogram.

Explain your reasoning.

I know this because _____
