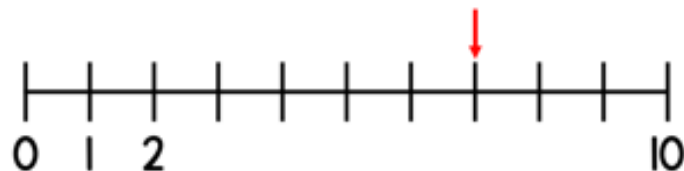


# Flashback 4

Year 1 | Week 5 | Day 1

- 1) What number is the arrow pointing to?



- 2) Use  $>$  or  $<$  to compare.

$$5 \bigcirc 7$$

- 3) How are the apples sorted?

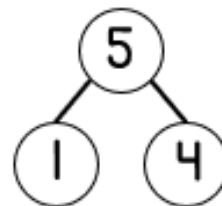


- 4) How many cakes are there?

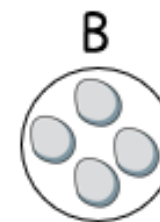


Monday

1) What is the whole?



2) Which group has the fewest?

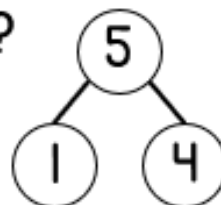


3) How many bears are there?



4) Draw 8 counters.

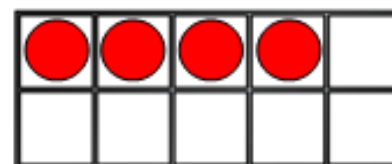

- 1) What are the parts?



- 2) Write the numbers from smallest to greatest.

10, 1, 5

- 3) Draw counters to represent the bears.



- 4) What number comes next?

2, 3, 4, 5, \_\_

Wednesday

# Flashback 4

Year 1 | Week 5 | Day 4



1)  $2 + 4 = \square$

2) What colour is the 2<sup>nd</sup> circle?



3) What number comes next? 6, 7, 8, 9, \_\_

4) What number comes next? 7, 6, 5, \_\_

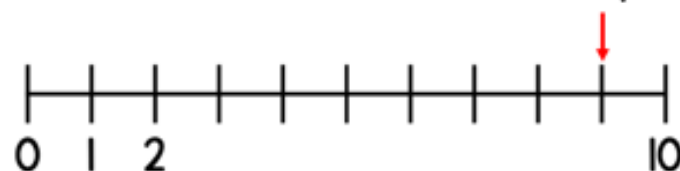


Thursday

1)  $5 + 2 = \square$



2) What number is the arrow pointing to?



3) What number comes next? 4, 3, 2, 1, \_\_

4) Write the number 6 as a word.