







T	O	Tth	Hth	Thth

T	O	Tth	Hth	Thth

T	O	Tth	Hth	Thth

T	O	Tth	Hth	Thth

O	Tth	Hth	Thth
			

There are tenths.

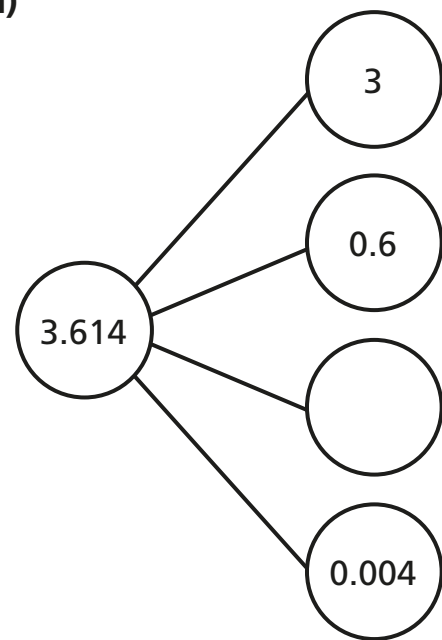
There are thousandths.

The number in digits is

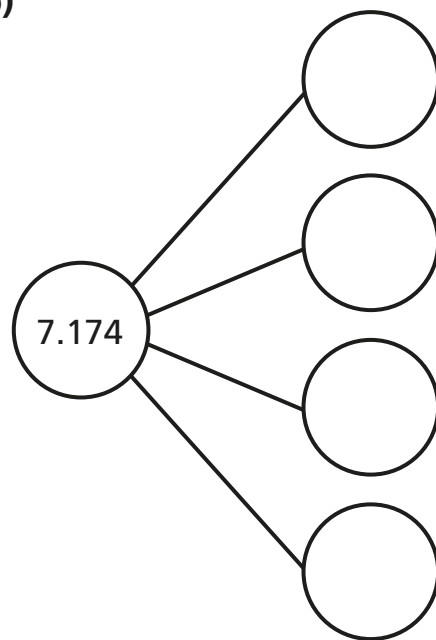
f) 19.03

4 Complete the part-whole models.

a)



b)



5 Complete the number sentences.

a) $17.134 = 10 + 7 + 0.1 + \boxed{} + 0.004$

b) $94.077 = 90 + 4 + 0.07 + \boxed{}$

c) $\boxed{} = 30 + 4 + 0.07 + 0.009$

6 Complete the number sentences.

$1.456 = 1 + 0.4 + \boxed{} + 0.006$

$1.456 = 1 + 0.3 + \boxed{} + 0.006$

$1.456 = 1 + 0.2 + \boxed{} + 0.006$

$1.456 = 1 + \boxed{} + 0.006$

7 Mo and Annie have represented 0.121 on their place value charts.

Mo's chart

O	Tth	Hth	Thth
	●	● ●	●

Annie's chart


O	Tth	Hth	Thth
		● ● ● ● ● ● ● ●	●



Mo

Only my grid shows 0.121

Both our grids show 0.121



Annie

Who do you agree with? _____

Explain why.

