

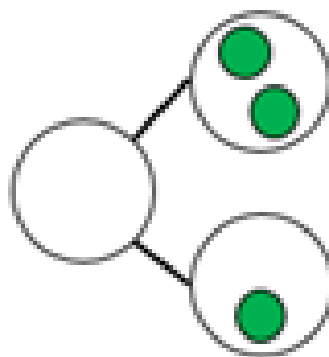
Count one more to 20

Wednesday 20th January


1) $5 + \square = 10$



2) Draw the whole.




3) Is there a key for each house?



4) One less than four is _____.



One more



Annie counted 10 gummies in a bag.
She found **one more** stuck inside.
How many gummies were in the bag?

One more than 10 is 11

Can you find one more than....

11	12	13	14	15	16	17	18	19	20
----	----	----	----	----	----	----	----	----	----

One more than 14

11	12	13	14	15	16	17	18	19	20
----	----	----	----	----	----	----	----	----	----

One more than 16

Can you find one more than....

11	12	13	14	15	16	17	18	19	20
----	----	----	----	----	----	----	----	----	----

One more than 12

11	12	13	14	15	16	17	18	19	20
----	----	----	----	----	----	----	----	----	----

One more than 11

Can you find one more than....

11	12	13	14	15	16	17	18	19	20
----	----	----	----	----	----	----	----	----	----

One more than 15

11	12	13	14	15	16	17	18	19	20
----	----	----	----	----	----	----	----	----	----

One more than 14

Use the number track to help you find one more than...

Can you find one more than 14?

Can you find one more than 19?

Can you find one more than 15?

Can you find one more than 11?

11	12	13	14	15	16	17	18	19	20
----	----	----	----	----	----	----	----	----	----

One more than

14

One more →

15

One more →

16

11	12	13	14	15	16	17	18	19	20
----	----	----	----	----	----	----	----	----	----

One more than ...

18

One more →

19

One more →

20

11	12	13	14	15	16	17	18	19	20
----	----	----	----	----	----	----	----	----	----

Have a think



16 is one more than

Eleven is one more than

One ten and 3 ones is one more than

Please complete worksheet.

Wednesday

11	One more →			
15	One more →			
18	One more →			
16	One more →			
16	One more →		One more →	
18	One more →		One more →	

0 1 2 3 4 5 6 7 8 9 10 11 12 13 14 15 16 17 18 19 20

Plenary

Teddy thinks of a number.



1 more than his number is 11

What is his number?
Prove it.