


1) What is 10×7 ?

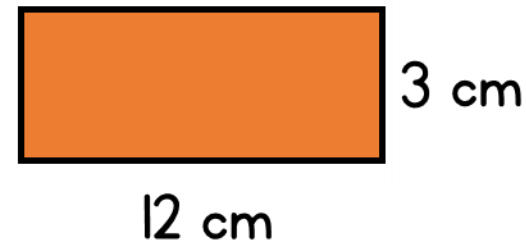
2) Work out $90 \div 10$

3) What is seven multiplied by one?

4) Find the perimeter of the rectangle.



What's the time?




1) What is 3×12 ?

2) Find $36 \div 6$

3) Six divided by six is equal to?

4) Find the sum of 3,482 and 1,563



What's the time?

1) Work out $3 \times 3 \times 4$

2) What is nine multiplied by eight?

3) $12 \div 1$ is equal to?

4) Work out $3,924 - 1,451$



What's the time?

1) Complete the factors of 15
1, 3, _____, _____

2) What is 7×3 ?

3) Work out fifty-four divided by six

4) 9 kilometres = _____ metres




What's the time?

1) Write all the factors of 8

2) Work out 8×11

3) What is ten multiplied by 8?

4) $3,000 \text{ m} = \underline{\hspace{2cm}} \text{ km}$



What's the time?