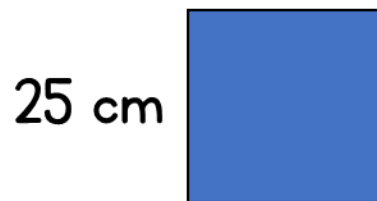


Flashback 4


1) What is $635 \div 5$?

2) What is the area of the square?



3) Work out 43,000 divided by 100


4) Round 2,427 to the nearest ten



Flashback 4

1) 835 ml of juice is poured equally between 5 glasses.

How much juice is in each glass?




2) Work out 38×23

3) Work out 20×60

4) Milo spends £72, £34 and £59
How much does he spend in total?


Flashback 4

- 1) 756 flowers are split equally between 3 vases. How many flowers are in each vase?
- 2) Work out 847×38
- 3) Work out 4758 divided by 6
- 4) Mia has £30. She spends £15.32 on food and £6.04 on books. How much has she got left?



Flashback 4

- 1) Will $865 \div 5$ have a remainder?
- 2) Multiply 27 by 15
- 3) A square has perimeter 24 cm.
Work out the length of the sides of the square.
- 4) Write the Roman numeral MCCL as an ordinary number



Flashback 4

1) Write a fraction equivalent to $\frac{1}{2}$

2) Multiply 168 by 5

3) Work out the perimeter of the rectangle.

6 mm



20 mm

4) Write "half a million" in figures.

