

1) Complete $\frac{1}{3} = \frac{\square}{15}$

2) What is $568 \div 4$?


3) Work out the area of the rectangle.

7 mm



18 mm

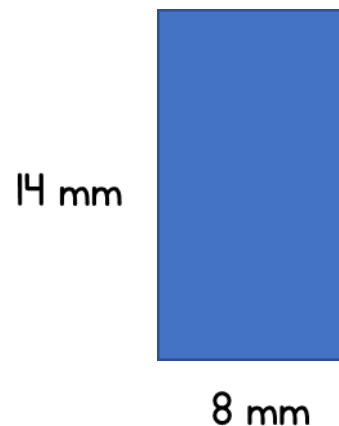
4) How many lines of symmetry does a rectangle have?




1) Complete $\frac{9}{12} = \frac{\square}{4}$

2) Work out $86 \div 5$

3) Work out the perimeter of the rectangle.



4) Add together 365 and 879





1) Change $\frac{7}{4}$ to a mixed number.

2) What is 47×32 ?

3) Fill in the missing number $36 \div \text{----} = 4$

4) What is one hundred more than 28,409?






1) Change $\frac{11}{3}$ to a mixed number.

2) Complete $\frac{7}{10} = \frac{\square}{30}$

3) Work out 165×7

4) Annie has £27. She spends £4.50
How much money does she have left?



1) Complete $2\frac{3}{4} = \frac{\square}{4}$

2) Write a fraction equivalent to $\frac{2}{3}$

3) Work out 64×23

4) What is the value of the 4 in the number 243, 157?