


Answers

1 Complete the sentences.

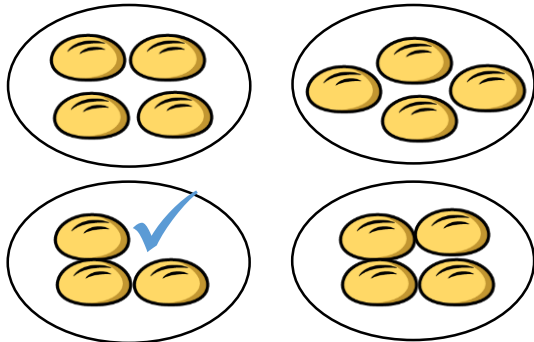


There are 3 equal groups of 5 bananas.



There are 4 equal groups of 2 fish.

2 Tick the group that is **not** equal to the others.



3



Complete the addition sentence to work out how many apples in total.

$$\boxed{3} + \boxed{3} + \boxed{3} + \boxed{3} + \boxed{3} = \boxed{15}$$

1 mark

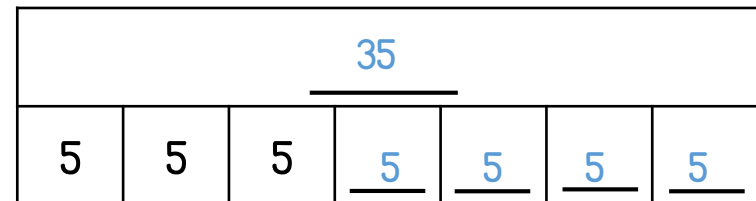
Complete the multiplication sentence to work out how many apples in total.

$$\boxed{5} \times \boxed{3} = \boxed{15}$$

1 mark

4

Complete the bar model to show $7 \times 5 =$

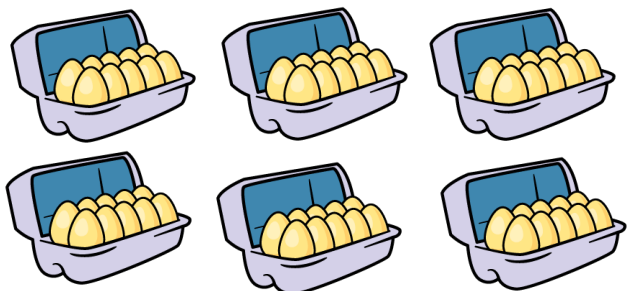


1 mark

2 marks

1 mark


- 5 Each box contains 10 eggs.



How many eggs are there altogether?

60 eggs

- 6 Jack makes an array with cubes.



Write **two** different number sentences using \times and $=$ to represent Jack's array.

Award 1 mark for two correct number sentences.

$$2 \times 7 = 14$$

$$7 \times 2 = 14$$

$$14 = 2 \times 7$$

$$14 = 7 \times 2$$

- 7 Fill in the missing numbers.

$$0 \times 10 = \boxed{0}$$

$$60 = \boxed{12} \times 5$$



2 marks

- 8 Harry has 6 of these coins.



He also has 11 of these coins.



How much money does he have in total?

$$6 \times 5p = 30p$$

$$11 \times 2p = 22p$$

Award 1 mark for correct multiplications or repeated additions.

Total: 52p

Award 2 marks for a correct answer of 52 pence.

52 pence



2 marks

Circle how confident you feel with multiplication.

1

2

3

4

5

Not
confident

Very
confident



1 mark