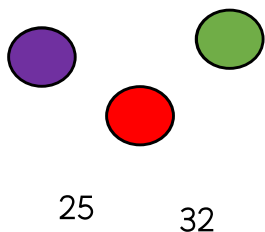


Answer the questions to match the pictures.


Kelly has 3 coloured circles and 2 numbers. Complete the table to show how many different ways she could do if she wants to pair a colour and a number.

Colours	Numbers
Green	25
Purple	25
Red	25



Andrew has 2 drinks and 3 foods. Complete the table to show how many different snacks he can eat.

Foods	Drinks
Pizza	Juice
Sandwich	Juice
Hamburger	Juice




Daisy has 2 shape cards and 2 number cards.



She chooses a shape card and a number card.  
List all the possible ways she could do this.


Ella has 2 shape cards and 3 number cards.



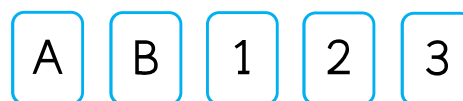
She chooses a shape card and a number card.  
List all the possible ways she could do this.

Tony has 2 shirts and 3 short pants. Complete the table to show how many different outfits he can make.

Shirts	Shorts
Green	Green
Green	Brown
Green	Blue



Nate has 2 letter cards and 3 number cards.



He chooses a letter card and a number card.  
List all the possible ways he could do this.