


# Flashback 4

- 1) What is 75 divided by 3?
- 2) Work out  $124 \times 3$
- 3) Share 60 into 3 equal groups
- 4) \_\_\_\_\_ metres = Half a kilometre



# Flashback 4

- 1) Work out  $85 \div 4$
- 2) What is 72 multiplied by 5?
- 3) Find the product of 5, 8 and 9
- 4) Round 4,523 to the nearest 1,000




# Flashback 4


1) Find  $575 \div 5$

2) What is  $249 \times 3$ ?

3) Multiply 11 by 12



4) Round 4,523 to the nearest 100





- 1) Calculate  $5 \times 12$
- 2) Divide 69 by 3
- 3) Find the product of 3, 4 and 5
- 4) A laptop costs £4,000  
A record player costs £472 less than a laptop.  
How much does a record player cost?

1) Which shape has the largest area?



2) Divide 75 by 3

3) What are the factors of 14?

4) Write 27 in Roman Numerals.