
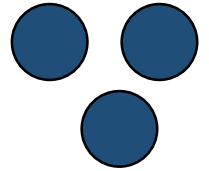


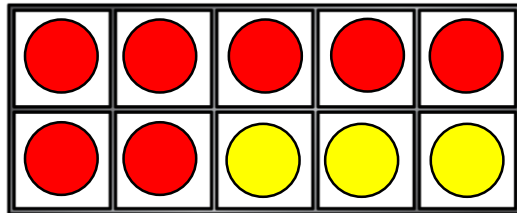
1) Work out $4 + 3$



7



2) What is $7 + 3$?



10

3) What is one more than 12?

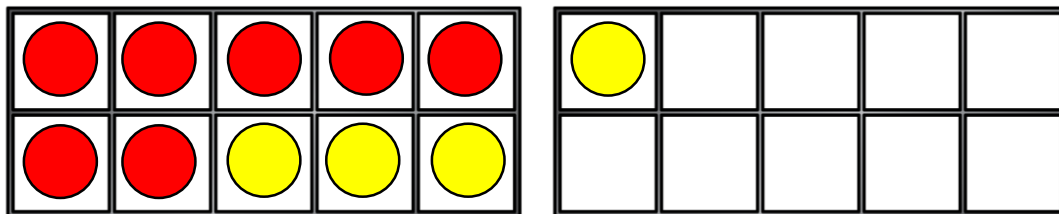
13

4) Name the shape.

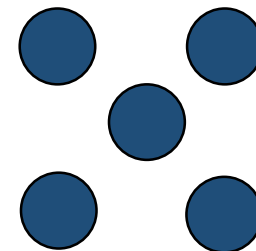


rectangle

1) Work out $7 + 4$




||




2) What is $6 + 4$? 10

3) Write the number **seventeen** in numerals. 17

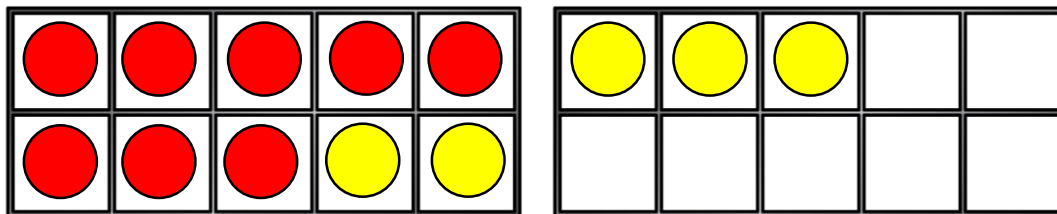
4) Name the shape.



circle



1) Add 5 and 8 together.




13

2) What is $5 + 5$? 10

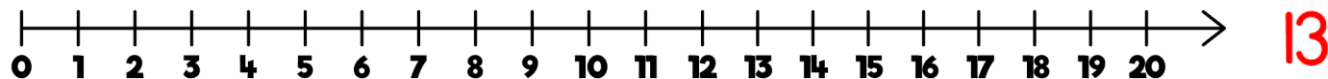
3) Write the number **eleven** in numerals. 11

4) Name the shape.



triangle

1) Calculate $9 + 4$




2) What is one more than 7? 8


3) Complete the sentence using less or more.

7 is less than 15

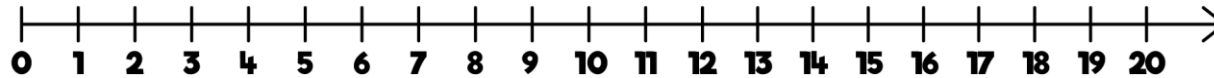
4) Name the shape.



rectangle



1) Calculate $8 + 6$ **14**



2) What is one more than 15? **16**

3) Complete the sentence using less or more.

12 is more than 3

4) Name the shape.



square