
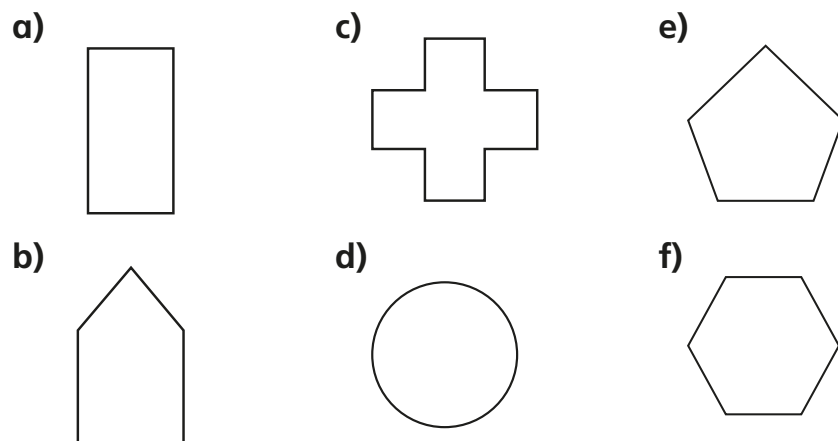


- 1** Which shapes have a vertical line of symmetry?



Compare answers with a partner.

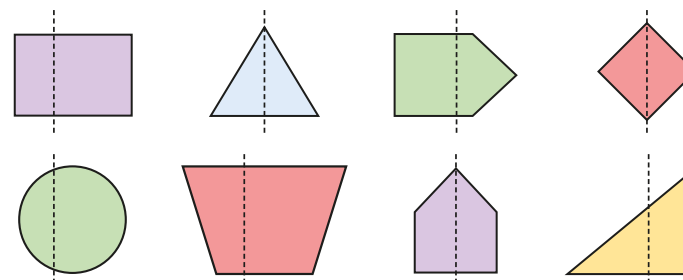
- 2** Draw the vertical line of symmetry on each shape.



Compare answers with a partner.

- 3** Annie is drawing a vertical line of symmetry on some shapes.

Which shapes have a correct line of symmetry?



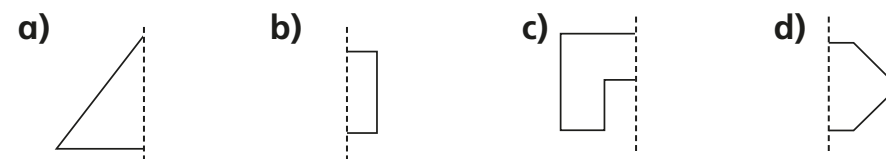
Talk to a partner about any mistakes Annie has made.

- 4** Draw a shape that has 6 sides and a vertical line of symmetry.

- 5** Here are some halves of shapes with their vertical line of symmetry drawn.

Complete the shapes.

Write how many sides and how many vertices each shape has.



Draw your own problem like this for a partner.